

**American University of Beirut**  
**Physics Department**  
**PHYSICS 103**  
**Fall 2005**  
**Instructor: Prof. Tarek Ibrahim**

**FINAL EXAM**

Print your name here: \_\_\_\_\_ Student ID # \_\_\_\_\_

Signature \_\_\_\_\_

**Important instructions -- please read carefully before you begin the exam.**

Work each problem in **part (B)** on the sheet of paper provided (**use the back of the same sheet if necessary**) and **write your last name on the top of each page**. This is essential, as the pages will be separated for grading purposes.

Put a box around your final answer together with the correct units, but show your work clearly in the spaces provided on each page.

A detachable formula sheet is included as the last page of the exam. Please do NOT hand it in with your work.

Part A (10 points)	
Part B (40 points)	
Total (50 points)	

**Part A: (10 points)**

- (1) Maria throws two stones from the top edge of a building with a speed of 20 m/s. She throws one straight down and the other straight up. The first one hits the street in a time  $t_1$ . How much later is it before the second stone hits?
- 5 s
  - 4 s
  - 3 s
  - Not enough information is given to work this problem.
- (2) A baseball is thrown by the center fielder (from shoulder level) to home plate where it is caught (on the fly at an equal shoulder level) by the catcher. At what point is the
- at the top of the trajectory
  - speed is constant during entire trajectory
- (3) A box is to be moved across a level surface. A force of magnitude 200 N may be applied at an angle of  $30^\circ$  below the horizontal to push the box or at an angle of  $30^\circ$  above the horizontal to pull the box, either application sufficient to overcome friction and move the box. Which application will cause the box to have the greater acceleration?
- the one below the horizontal
  - the one above the horizontal
  - both give equal acceleration
  - more information is needed
- (4) A 100-kg box is placed on a ramp. As one end of the ramp is raised, the box begins to move downward just as the angle of inclination reaches  $15^\circ$ . What is the coefficient of static friction between box and ramp?
- 0.15
  - 0.27
  - 0.77
  - 0.95
- (5) Two ropes are attached to a 40-kg object. The first rope applies a force of 25 N and the second, 40 N. If the two ropes are perpendicular to each other, what is the resultant acceleration of the object?
- $1.2 \text{ m/s}^2$
  - $3.0 \text{ m/s}^2$
  - $25 \text{ m/s}^2$
  - $47 \text{ m/s}^2$

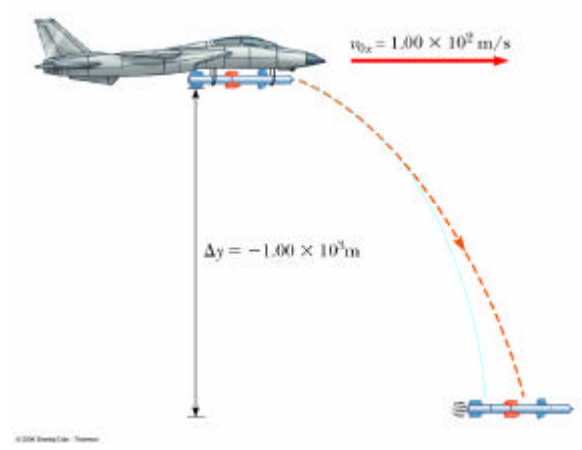
- (6) A horizontal force of 200 N is applied to a 55-kg cart across a 10-m level surface. If the cart accelerates at  $2.0 \text{ m/s}^2$ , then what is the work done by the force of friction as it acts to retard the motion of the cart?
- 1 100 J
  - 900 J
  - 800 J
  - 700 J
- (7) A 20-N crate starting at rest slides down a rough 5.0-m long ramp, inclined at  $25^\circ$  with the horizontal. 20 J of energy is lost to friction. What will be the speed of the crate at the bottom of the incline?
- 0.98 m/s
  - 1.9 m/s
  - 3.2 m/s
  - 4.7 m/s
- (8) A uranium nucleus (mass 238 units) at rest decays into a helium nucleus (mass 4.0 units) and a thorium nucleus (mass 234 units). If the speed of the helium nucleus is  $6.0 \times 10^5 \text{ m/s}$ , what is the speed of the thorium nucleus?
- $1.0 \times 10^4 \text{ m/s}$
  - $3.0 \times 10^4 \text{ m/s}$
  - $3.6 \times 10^4 \text{ m/s}$
  - $4.1 \times 10^4 \text{ m/s}$
- (9) A fan blade, initially at rest, rotates with a constant acceleration of  $0.025 \text{ rad/s}^2$ . What is the time interval required for it to reach a 4.2-rad displacement after starting from rest?
- 1.8 s
  - 2.0 s
  - 16 s
  - 18 s
- (10) A uniform bridge span weighs  $50.0 \times 10^3 \text{ N}$  and is 40.0 m long. An automobile weighing  $15.0 \times 10^3 \text{ N}$  is parked with its center of gravity located 12.0 m from the right pier. What upward support force does the left pier provide?
- $29.5 \times 10^3 \text{ N}$
  - $35.5 \times 10^3 \text{ N}$
  - $65.0 \times 10^3 \text{ N}$
  - $32.5 \times 10^3 \text{ N}$

**Part B (40 points)**

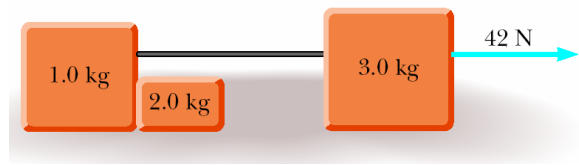
Answer five questions of the following

(1) A car is approaching a hill at 30.0 m/s when its engine suddenly fails just at the bottom of the hill. The car moves with a constant acceleration of  $2.00 \text{ m/s}^2$  while coasting up the hill. (a) Find the position and the velocity of the car after 10.0 s, taking  $x = 0$  at the bottom of the hill, where  $v_i = 30.0 \text{ m/s}$ . (b) Determine the maximum distance the car rolls up the hill. (c) How long does it take the car to reach that point of maximum distance?

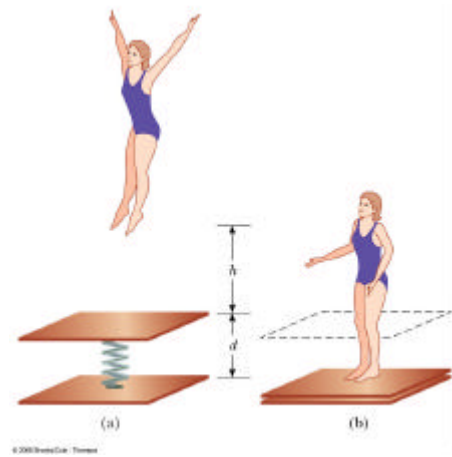
(2)  $2 \text{ m/s}$  drops a rocket from a considerable height. The rocket immediately fires its engines, accelerating at  $10.0 \text{ m/s}^2$  in the x-direction while falling under the influence of gravity in the y-direction. When the rocket has fallen 1.00 km, find (a) its velocity in the y-direction, (b) its velocity in the x-direction, and (c) the distance it moved in x-direction. Neglect air resistance.



(3) Assume that the three blocks in the figure, move on a frictionless surface and that a 42-N force acts as shown on the 3.0-kg block. Determine (a) the acceleration given this system, (b) the tension in the cord connecting the 3.0-kg and the 1.0-kg blocks, and (c) the force exerted by the 1.0-kg block on the 2.0-kg block.

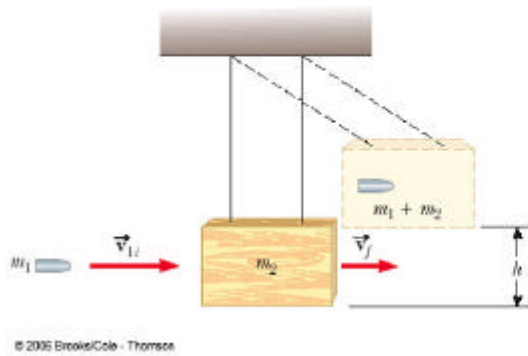


- (4) A 65.0 kg circus acrobat drops from a height of 2.00 meters straight down onto a  $3 \times 10^3$  N/m, as in the figure. (a) How fast is she moving when she hits the board? (b) By what maximum distance does she compress the spring? (c) What is the highest point she can go up after that? (Ignore friction)




- (5) The ballistic pendulum is a device used to measure the speed of a fast-moving bullet. The bullet is fired into a large block of wood suspended from some light wires. The bullet is stopped by the block, and the entire system swings up to a height  $h$ . It is possible to obtain the initial speed of the bullet by measuring  $h$  and the two masses. Assume that the mass of the bullet is 5.00 g, the mass of the

pendulum is 1.500 kg, and  $h$  is 9.00 cm. (a) Find the gravitational potential energy of the block-bullet at height  $h$ , take your zero level at  $h = 0$ . (b) Find the speed of the block-bullet right after the bullet gets into the block. (c) Find the initial speed of the bullet.



(6) A hungry 700-N bear is walking across a 6.00-m-long beam hanging at the end. The beam is uniform, weighs 200 N, and is 6.00 m long; the goodies weigh 80.0 N. (a) Draw a free-body diagram of the beam. (b) When the bear is at  $x = 1.00$  m, find the tension in the wire and the components of the reaction force at the hinge. (c) If the wire can withstand a maximum tension of 900 N, what is the maximum distance the bear can walk before the wire breaks?





### Useful Formula and Definitions

(a) *The equations of motion with constant acceleration ( $a$ ) in  $x$ -direction are:*

(1)  $v = v_0 + a t$ ,

(2)  $\mathbf{Dx} = v_0 t + \frac{1}{2} a t^2$ ,

(3)  $v^2 = v_0^2 + 2 a \mathbf{Dx}$ .

(b) The free fall acceleration magnitude is  $9.8 \text{ m/s}^2$  and it is pointing downward.

(c) Vector  $\mathbf{A}$  makes an angle  $\mathbf{q}$  with x-axis has the components

$$A_x = |\mathbf{A}| \cos \mathbf{q} \text{ and } A_y = |\mathbf{A}| \sin \mathbf{q}, |\mathbf{A}|^2 = A_x^2 + A_y^2, \tan \mathbf{q} = A_y/A_x$$

(d) If  $\mathbf{R} = \mathbf{A} + \mathbf{B}$ ,  $R_x = A_x + B_x$  and  $R_y = A_y + B_y$

(e)  $W = m g$

(f) Friction force  $F$  is  $F = \mu N$

(g)  $\mathbf{S F} = m \mathbf{a}$

(h)  $W = |\mathbf{F}| |\mathbf{d}| \cos \mathbf{q}$

(i)  $P.E_g = m g h$ ,  $P.E_s$  <sup>2</sup>

(j) <sup>2</sup>

(k)  $E_f - E_i = W$

(l)  $\mathbf{P} = m \mathbf{v}$

(m) The equations of motion with angular acceleration ( $\mathbf{a}$ ) in x-direction are:

a.  $\mathbf{w} = \mathbf{w}_0 + \mathbf{a} t$ ,

b.  $\mathbf{Dq} = \mathbf{w}_0 + \mathbf{a} t^2$ ,

c.  $\mathbf{w}^2 = \mathbf{w}_0^2 + 2 \mathbf{a} \mathbf{Dq}$

(n)  $|\mathbf{t}| = |\mathbf{r}| |\mathbf{F}| \sin \mathbf{q}$