

ARCHAEOLOGY 212

Methodology II

Final Examination

Date: 24 June 1997

Time: TWO hours

(Prof. H. Seeden)

I

25 %

Briefly identify the SIX attached archaeological illustrations as follows:

1. SITE MAP

1. Which heritage **SITES** are shown ?
2. What **PERIODS** do they belong to ?
3. What do these sites look like **TODAY** ?
4. How is this heritage **MANAGED** ?

2a-e. ARTIFACTS from the early Roman period

1. **NAME** the artifact(s)
2. What **MATERIAL** is it made of ?
3. What was its (their) **FUNCTION** ?
4. What was its (their) living **CONTEXT** ?

(Each correct answer is ONE point, i.e. FOUR points for each correctly identified illustration)

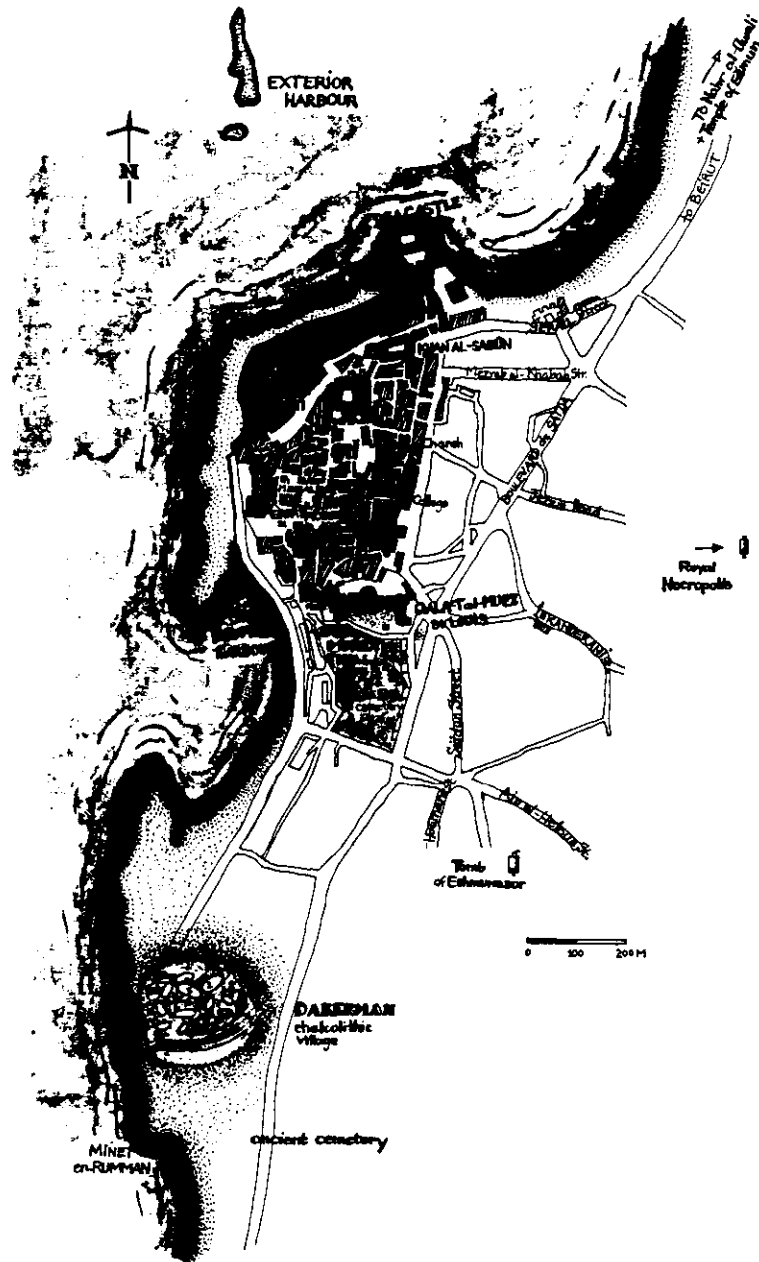
II

75 %

Can the Lebanese achieve better management of their cultural heritage ?

1. Why is 'Sixty London Wall' a model urban excavation?
2. What about the excavations in the **Beirut** city center?
3. Is Lebanon's archaeological heritage **related to you**?
4. What is the **missing link** between you and your heritage?
5. Compare your cultural heritage with that of the **United States**?
6. What can **prehistoric perspectives** and those of **native peoples** add to our life?
7. How can **heritage education help**, as it has done **elsewhere**?
8. What is **hand-on archaeology**?
9. Design an **archaeological fun project** for a **Lebanese class context**.


①



(Prepared by Helga Seiden, RUB, Dept. of History & Archaeology)
For the NCT in Lebanon, Institute of Tourism, classes for tourist guides, May-June 1992

2

(a-e)




a



a



a



b



c



d



e