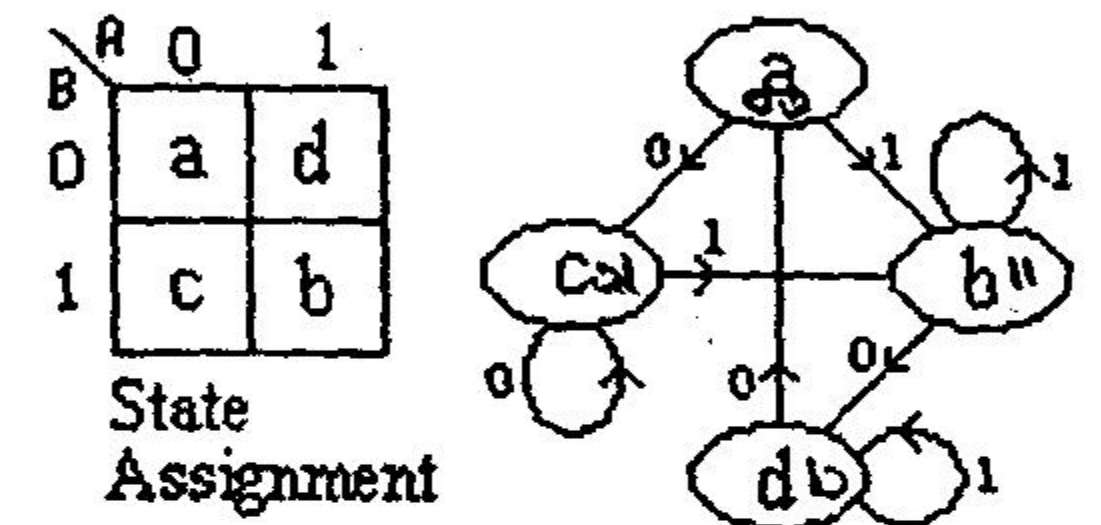
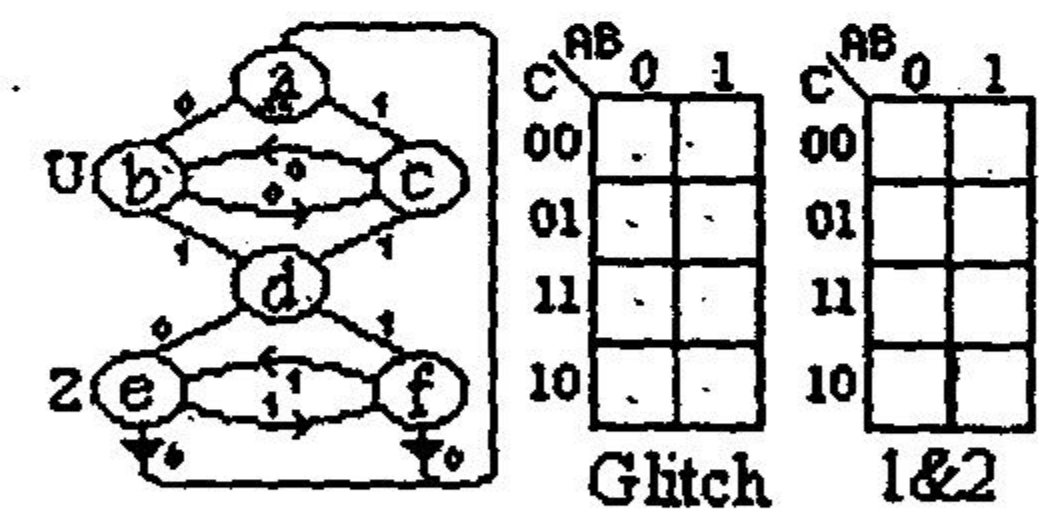


PHY 233
Quiz II

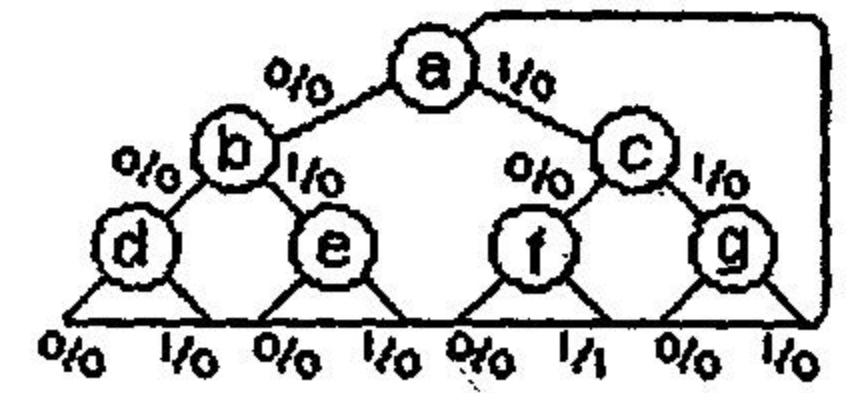
- ✓ 1. The figure shows a flow chart and its state assignment.
The ASM has a single one bit input (x)
- ✓ a. Prepare the next state charts (Tables) (7 pts.)
 - ✓ b. Prepare the Karnaugh Maps for D_A and D_B (7 pts.)
 - ✓ c. Convert the D_B map to JK maps (7 pts.)
 - ✓ d. Realized the circuit by Mux implementation (7 pts.)



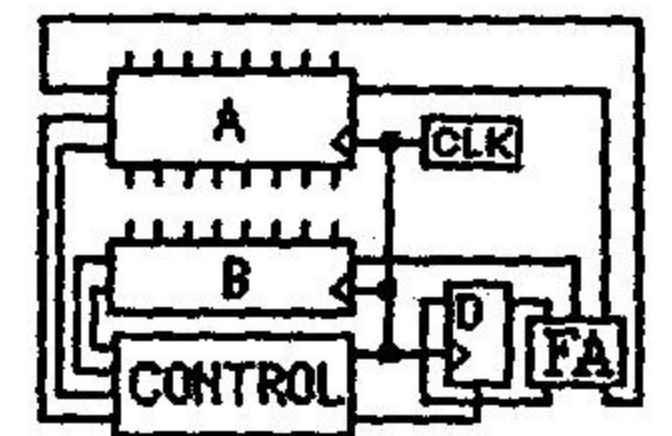
2. a. Make the state assignment in such a way as to avoid output glitches.
Note that states b & e have output (10 pts.)
- b. Assume the input is synchronous and repeat the state Assignment in such a way as to obey Rules 1&2 (10 pts.)
- ✓ c. Calculate the number of distinct state assignments (5 pts.)



3. For the loose state transition diagram shown
- ✓ a. Reduce the number of states by the *method of grouping* (12 pts.)
 - ✓ b. Draw the reduced state transition diagram, and identify the "hopeful/hopeless" paths in it (3 pts.)



4. a. Identify the computation performed by the circuit. (4 pts.)
- b. Redraw on a larger scale and label all the wires other than clock (8 pts.)



5. Answer 3 of the following 4 questions. (3x5 = 15 pts.)
Note: The 4th answer will be ignored.
- a. Is there an advantage to implement the ASM of Q1 by the "One Hot" method? Explain.
 - b. When is the Go-No go configuration used?
 - c. In which situations will the Implication chart method fail to minimize?
 - d. When is the "Handshake" configuration used?

Good Luck!

28 + 25 + 15 + 12 + 15 = 100